

Thakur Educational Trust's (Regd.)
THAKUR VIDYA MANDIR HIGH SCHOOL & JUNIOR COLLEGE
I Terminal Examination 2016-17
Subject : English

Name : _____ Std: II Div : _____ Roll No. _____
DATE -27/09/2016 MARKS: 60
Time : 2 hrs 45 mins

QIA] Fill in the blanks by choosing the correct words from the bracket: (4)
[Ashwin, four, sleeping, better]

1. A big, strong lion was _____ in the Sun.
2. Fatima dances _____ than Mona.
3. _____ had gone to the park with his mother.
4. Everyone has _____ wisdom teeth.

B] Write whether the following statements are True or False: (4)

1. Simple Simon met a Henny Penny. _____
2. New born babies have no teeth. _____
3. The place where you sleep should be airy. _____
4. The first tooth appears when a baby is about 7 years old. _____

C] Match the column : (4)

- | A | B |
|-----------------|-------------------------------|
| 1. roared | a) a short sleep |
| 2. nap | b) some |
| 3. several | c) frightened |
| 4. scared sound | d) made a long, loud and deep |
1. _____ 2. _____ 3. _____ 4. _____

QII. A] Complete the lines of the poem : (2)

Good better best,

And your better best.

B] Who said to whom : (4)

1. " Are you happy now ".

2. " What a beautiful tree ".

C] Frame sentences :

(4)

1. splashed – _____

2. nap – _____

QIII A] Answer the following questions:

(8)

1. How did the mouse set the lion free ?

Ans: _____

2. What are the permanent teeth ?

Ans: _____

3. Why was Malhar surprised ?

Ans: _____

4. How do the birds sleep ?

Ans: _____

QIII. B] Do as directed :

(10)

1. Write the rhyming word for the following :

i) sow - _____ ii) shower - _____

2. Write a word that end in ‘ **ing** ’ :

3. Write the following names in alphabetical order :

Atul, Fahim, Raj, Babloo

Ans: _____

4. Complete the following table :

	Male name	Female name
i)	_____	duck
ii)	cock	_____

5. Fill in the blank with (‘ Is ’ or ‘ Are ’)
“ _____ you happy now? ” said Malhar.

6. Write the word correctly :
Stich - _____

7. Write opposite of **beautiful** x _____

Grammar

QI. Do as directed : **(17)**

1. Make a new word by adding just one letter in the box and rewrite the word:

+ loud =



2. The poor man lived in _____ old hut. (use ‘ a ’ or ‘ an ’)

3. I am made of wax, I give you light, the longer I stand, The shorter I grow.
Who am I ? _____ (solve the riddle)

4. Write plural for the given words :

a) dress - _____ b) parrot - _____

5. _____ and a lady (Write the masculine form)

6. (Complete the word using consonants




F		U		T	S
---	--	---	--	---	---

7. I treat patients by giving them medicines.

I am a _____

8. Write the young one of drake-duck - _____



9.  _____ Name the picture.

10. leg, stomach, foot, arm .(Write in alphabetical order)

11. Rewrite the sentence using capital letters , full stop or question marks where necessary.

why did the greedy fox praise the crow

Ans: _____

12. Write 'P' if the underline noun is a Proper noun, and 'C' if it is common noun.

a) The Red Fort is in Delhi, India

b) Most birds builds nest on trees

QII. Write five lines on any one composition :

(5)

My best friend or The Farmer.

[illegible]

All the best

Q I A . Write in numerals :

(5)

1. One hundred and sixty four - _____
2. Three hundred and thirteen - _____
3. Two hundred and twenty two - _____
4. Four hundred and ninety seven - _____
5. One hundred eleven - _____

B] Write in words:

(5)

- a) 119 - _____
- b) 414 - _____
- c) 393 - _____
- d) 222 - _____
- e) 499 - _____

Q II A] Fill in the blanks :


(6)

1. _____ sides of a rectangle are of equal length.
2. The number 9 is _____ more than 4.
3. $3 \times 8 =$ _____
4. Shravan, Bhadra, _____
5. The cube has _____ faces and _____ edges .

B] Match the following : (4)

Column A

1. 99
2. 32-29
3. 8 + 0





Column B

- a) 8
- b) no edges and no corners
- c) 3
- d) 9 tens 9 units

Ans : 1 _____ 2. _____ 3. _____ 4. _____

Q III A. Do as directed.

- 1] Draw the following. (2)
- a) A curved line
- b) A cuboid




2] Complete the table : (2)

a. Cardinal number	Ordinal number	Ordinal name
1	_____	First
9	9 th	_____

3] Count forward after the given number by drawing dots. (2)

Number	Count forward	Dots	Number reached
19	9		_____

4] Take any two numbers at a time and make any 4 numbers. (2)



5] Write the numbers in order. (2)

59 to 62 - _____

6] Look at the pictures ,count tens and units and complete the additions. (2)

tens

3

units

23

+ 1

tens

1

units

11


3

tens


4

units

7] Count the dots .Make a group of tens and then add the remaining units.Write the total number of dots. (2)



8] Colour the flat surface of the object : (1)



9] Add /Subtract one after the other and write the correct numbers in the boxes. (2)

23+ 6 = - 3 =

B.) Put () for the right statement and (X) for the wrong statement.(5)

1. A cone has 2 faces and one corner.
2. A tomato is conical in shape .
3. The Cardinal name of the number 2 is second.
4. If yesterday was Wednesday then today is Tuesday.
5. The number 7 is 2 more then 5.

C] Solve the following : (8)

1. Addition

i) T U

1 6

+ 2 3

ii) T U

3 3

+ 4 4

2. Subtract

i) T U

3 7

- 2 5

ii) T U

7 8

-1 3

3. Add and subtract by counting forward.

i)

87

+

4

ii)

9

-

2

iii)

64

+

8

iv)

7

-

5

D. Word problems

(10)

1. Sujata had 36 cherries and her mother gave her more 12. How many cherries does she have in all ?

Tens	Units
<div><div></div></div>	

Ans : _____

2. Mr. Gupta made 32 pots but out of it his daughter Seeta broke 12 pots. How many pots are left now ?

Tens	Units
<div><div></div></div>	

Ans : _____

All the best